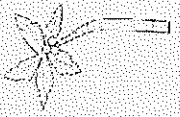

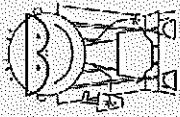


# Fun!



## Monday

Practice counting to 100 by ones and tens.  
K.CC.A.1.

Look outside. List five nouns that you see.  
L.K.1b

Draw 15 crabs  
K.CC.A.3

Write a short story telling about what you have done since the summer has begun.  
L.K.1b

## Tuesday

Fill in the blank with a rhyming word.  
hat, bat, cat, \_\_\_\_  
R.F.K.2a

There are two sandcastles on the beach. The water washes away one of them. How many are left?  
K.OA.A.2

Read a story with a friend or family member. Tell what happened in the beginning, middle, and end of the story.  
R.L.K.2

Solve:  
5+5=  
4+3=  
2+2=  
1+8=  
2+3=  
4+2=  
3+3=  
4+4=  
7+2=  
2+1=  
8+2=  
5+2=  
K.OA.A.1

## Wednesday

Write your numbers 0 to 20.  
K.CC.A.3


Read a story with a friend or family member. Tell them the author and the illustrator of the book. What do they do?  
R.L.K.5

Solve  
5 = \_\_\_\_ + \_\_\_\_  
K.OA.A.3



Write your alphabet using lower case letters.  
L.K.1a.

## Thursday

Write your alphabet using capital letters.  
L.K.1a.

How many?  
  
K.CC.B.5

Read the following words:  
the she  
of my  
to is  
you are  
R.F.K.3c

 +  =  
K.OA.A.1



## Friday

If I have five crabs and two more crawled up, how many crabs do I have in all?  
K.OA.A.2


Say These Words:  
bog, lut, duw,  
san, hep  
R.F.K.3

How many tens and ones?  
18 =      tens +      ones  
K.NBT.A.1

Circle the words that rhyme  
Hand, Band  
or  
Frog, Fan  
R.F.K.2a



# August



## Monday

Draw or create two and three dimensional shapes using paper or items that you can find near you.

K.G.B.5

Practice writing some interrogative (who, what, when, where, why, and how) sentences.

L.K.1e

Draw two groups of objects. Tell which one is greater than the other.

K.CC.C6

Complete:

- I went \_\_\_\_\_ the store.
- I went \_\_\_\_\_ a walk.
- I went to the movies \_\_\_\_\_ him.

L.K.1f

## Tuesday

With a parent or friend, write a story about something fun you have done this summer.

W.K.8

There are ten spiders in the tree. Two spiders jump into the water. How many spiders are left.

K.OA.A.2

Do walk and march mean the same thing? Discuss and act out.

L.K.5d

Solve:

$$5 = \begin{array}{r} \_ + \_ \\ \_ + \_ \\ \_ + \_ \\ \_ + \_ \\ \_ + \_ \\ \_ + \_ \end{array}$$

K.OA.A.4

## Wednesday

Choose a friend or family member to help you. When you two stand next to each other, which one is taller?

K.MD.A.2

Have a family member call out some words and you practice spelling them on your own.

L.K.2d

Gather some objects. Practice counting to 100 by tens and ones.

K.CC.B.4a

Draw a picture and label your favorite foods.

SI.K.5

## Thursday

Use your writing from Tuesday and use a digital tool (Computer) to publish your writing.

W.K.3

Solve  
 $2 + \_ = 10$

K.OA.A.3

Finish this sentence and continue.  
My favorite summertime activity is \_\_\_\_\_

L.K.1f

Use objects to help you solve the following problems.

$$\begin{array}{l} 2+8= \\ 6+4= \\ 11+3= \\ 7+5= \\ 3+4= \end{array} \quad \begin{array}{l} 1+9= \\ 2+3= \\ 14+4= \\ 12+5= \\ 12+2= \end{array}$$

K.OA.A.1

## Friday

Draw 2 triangles. Is there a way that you can put them together to make a rectangle?

K.G.B.6

Gather ten items around your house. Practice sorting them into groups. Discuss how you sorted them.

L.K.5a

Go on a shape hunt in your house or outside. Draw a picture of the shape and label them.

K.G.B.5

Practice writing your alphabet. Then practice saying the sounds of each letter.

RF.K.3a